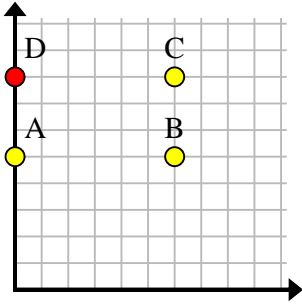




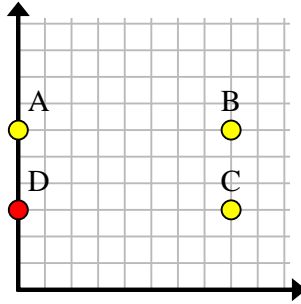


Find the coordinates of point D to make a rectangle.

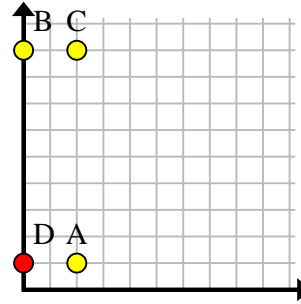
Ex)



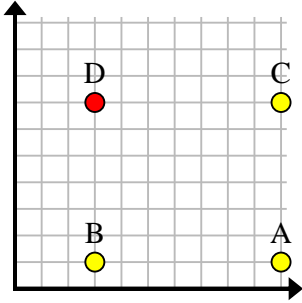
1)



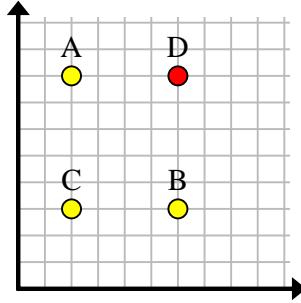
2)



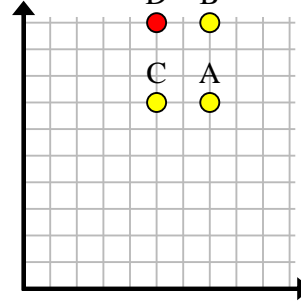
3)



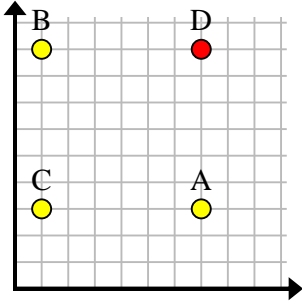
4)



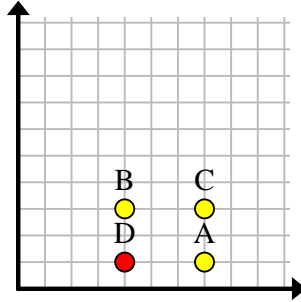
5)



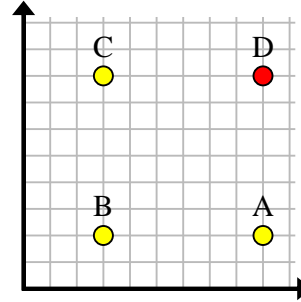
6)



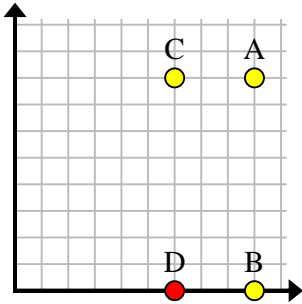
7)



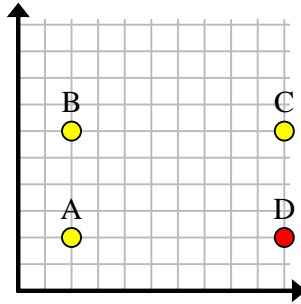
8)



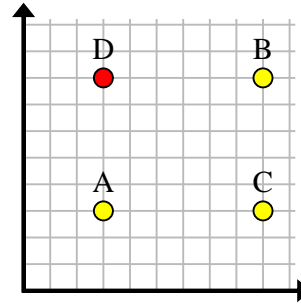
9)



10)



11)



Answers

Ex. (0, 8)

1. (0, 3)

2. (0, 1)

3. (3, 7)

4. (6, 8)

5. (5, 10)

6. (7, 9)

7. (4, 1)

8. (9, 8)

9. (6, 0)

10. (10, 2)

11. (3, 8)